
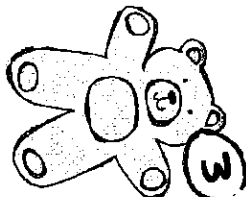


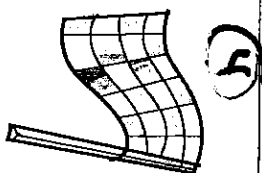
1 In the month of December, sunscreen goes on sale for 50% off the price it sells for in July. What is the supply & demand for sunscreen?




2 The newest book in a very popular series has just been released, and your bookstore only receives a few copies. The price of the book increases. What is the supply & demand for the new book?




3 During the holiday season the most popular toy increases in price because many kids want it. What is the supply & demand for the popular toy?



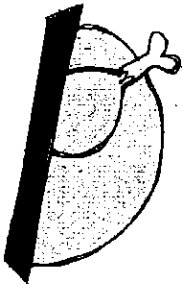
4 The video game "Extreme Racing 5" has just been released, and the older version "Extreme Racing 4" goes on sale. What is the supply & demand for "Extreme Racing 4?"




5 A shoe store is having a sale on all of last year's shoe styles. What is the supply & demand for last year's shoes?



6 A store is running low on Valentine's Day cards during the month of February. What is the supply & demand for Valentine's Day cards?



During the Thanksgiving season, the price of turkey increases. What is the supply & demand for Turkey?



When the newest version of the iPhone came out, the older version went on sale. What is the demand for the older iPhone?

Name: _____

High Demand & Low Supply

Low Demand & High Supply